



4.4.2. By the end of fourth grade, students will identify and draw points, line segments, rays, and angles.

1. Which word best describes the figure? 

- A. ray
- B. point
- C. segment

2. Which word best describes the figure? 

- A. segment
- B. ray
- C. line

3. Which word best describes the figure? 

- A. segment
- B. ray
- C. line

4. Which word best describes the figure? 

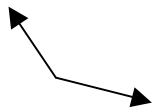
- A. point
- B. angle
- C. line

5. Name this angle.



- A. right
- B. acute
- C. obtuse

6. Name this angle.



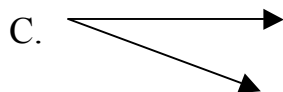

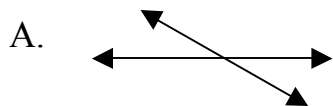
- A. right
- B. acute
- C. obtuse

7. Name this angle.



- A. right
- B. acute
- C. obtuse

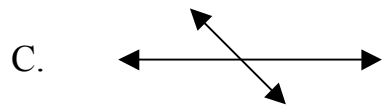
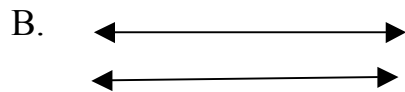
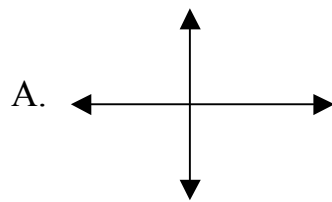
8. Which lines are parallel?



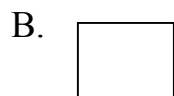
9. Which letter has a set of parallel lines?

- A. I
- B. T
- C. A

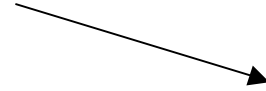
10. Which lines are perpendicular?



11. Which shape has no right angles?

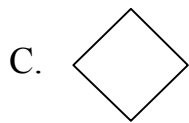
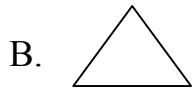
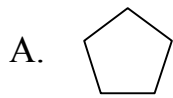


12. This drawing shows _____?



- A. an angle
- B. a ray
- C. a line segment

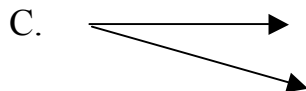


13. Which shape has all acute angles?



14. Which letter has right angles?

- A. Z
- B. T
- C. X

15. Which figure shows an angle?



Answers for 4.4.2

1. A
2. C
3. A
4. B
5. B
6. C
7. A
8. B
9. A
10. A
11. A
12. B
13. B
14. B
15. C